


# Geométrie


CMI



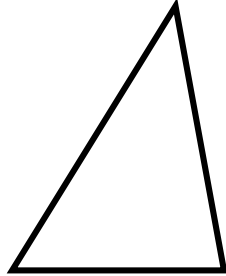
① Ces figures sont-elles des polygones ?



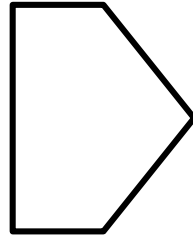
Oui Non



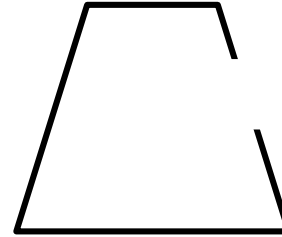
Oui Non




Oui Non




Oui Non



Oui Non







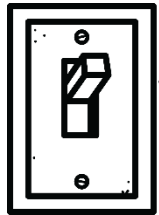

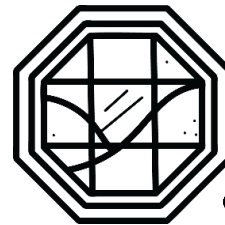


Oui Non



Oui Non

② Colorie de la bonne couleur.

<u>triangle</u>	<u>quadrilatère</u>	<u>pentagone</u>	<u>hexagone</u>	<u>octogone</u>
BLEU	JAUNE	ROUGE	VERT	VIOLET



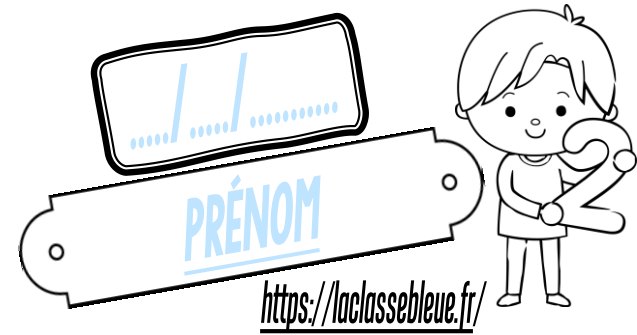
③ Dans ton cahier, trace un pentagone.

<https://laclassibleue.fr/>

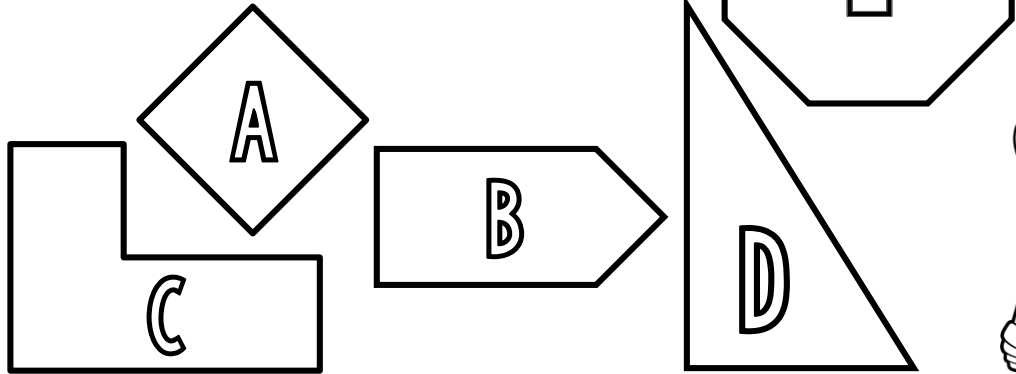
Geométrie / Les polygones

# Geométrie

CMI

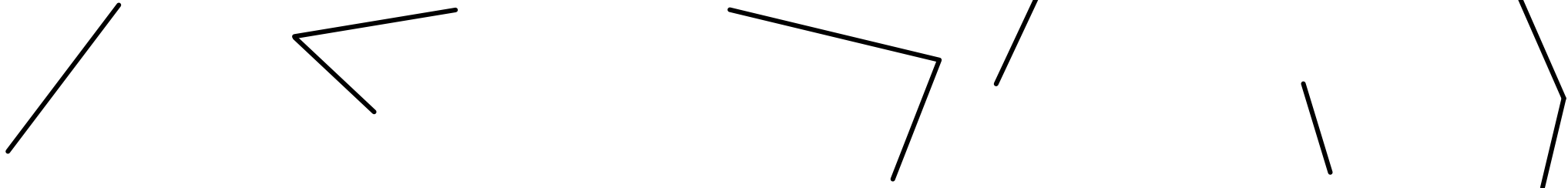


① Complète le tableau.



	<u>Nombre de côtés</u>	<u>Nombre de sommets</u>	<u>Famille de polygones</u>
A			
B			
C			
D			
E			

② Termine de tracer pour obtenir les polygones demandés.



un triangle

un pentagone

un quadrilatère


un hexagone

un octogone

③ Dans ton cahier, trace un quadrilatère avec 4 angles droits.

# Geométrie

CMI

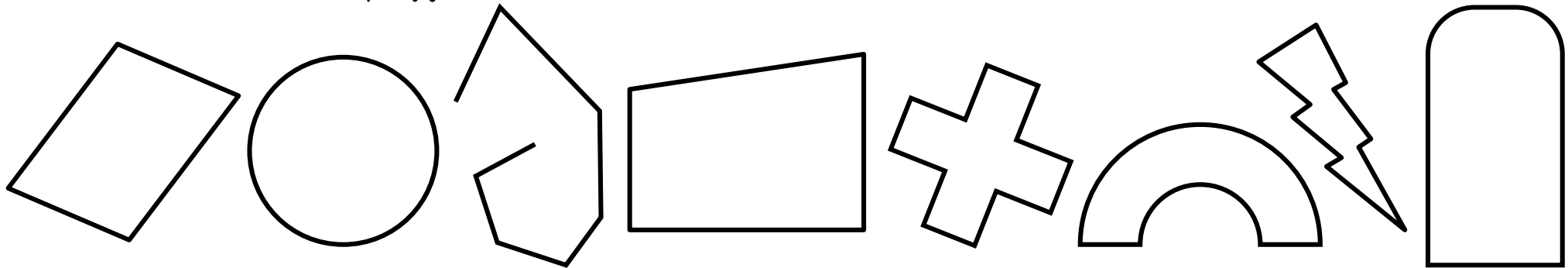


① Coche la bonne réponse.



1) Un polygone est <u>une ligne brisée fermée.</u>	<input type="radio"/> Vrai <input type="radio"/> Faux
2) Un quadrilatère est <u>un polygone à 3 côtés.</u>	<input type="radio"/> Vrai <input type="radio"/> Faux
3) Un segment d'un polygone est <u>un côté.</u>	<input type="radio"/> Vrai <input type="radio"/> Faux
4) Un polygone à 6 côtés est <u>un hexagone.</u>	<input type="radio"/> Vrai <input type="radio"/> Faux
5) La diagonale est un segment qui relie <u>deux sommets consécutifs.</u>	<input type="radio"/> Vrai <input type="radio"/> Faux
6) Un pentagone a <u>5 côtés</u> et <u>5 sommets.</u>	<input type="radio"/> Vrai <input type="radio"/> Faux
7) Le carré, le rectangle et l'octogone sont <u>des quadrilatères.</u>	<input type="radio"/> Vrai <input type="radio"/> Faux

② Colorie seulement les polygones.



③ Dans ton cahier, trace un hexagone avec un angle droit.